

A division of PhIE Learning Center

GATE ECE and EE Coaching by IITians GATE CLASSES

Assignment-3, Digital Electronics

Q1. Gray code representation of 61 is

- a) 100111
- b) 110011
- b) 100011
- d) 101011

Ans - b

Q2 Excess-3 code for $(23.105)_{10}$ is

- a) 0101 0110 . 0100 0011 1000
- b) 0101 0110 . 1100 0011 1000
- c) 0101 0110 . 0100 1011 1000
- d) 0001 0110 . 0100 0011 1000

Ans - a

Q3. $(8,4,-2,-1)$ code for $(35)_{10}$ is

- a) 0011 0101
- b) 0011 1101
- c) 0110 1000
- d) 0101 1011

Ans - d

Q4. $(A + C)(A + D)(B + C)(B + D)$ is equivalent to

- a) $AB + BC + CD$
- b) $AB + CD$
- c) $ABCD$
- d) $A + B + C + D$

Ans - b

Q5 Simplify Boolean function represented in sum of product of min-terms $F(A,B,C,D) = \Sigma(0, 4, 5, 6, 13, 14, 15) + \Phi(2, 7, 8, 9)$ is where Φ represent the don't care and A' is complement of A.

- a) $A'D' + BD + BC.$
- b) $AD + B'D' + BC.$
- c) $AD + B'D' + B'C'.$
- d) $AD + BD + BC.$

Ans - a

Q6. Simplify Boolean function represented in sum of product of min-terms $F(A, B, C, D) = \Sigma(1, 3, 4, 5, 9, 10, 11) + \Phi(6, 8).$ is where Φ represent the don't care and A' is complement of A

- a) $A'BC' + B'D + AB$
- b) $ABC' + B'D + AB'$
- c) $A'BC' + B'D + AB'$
- d) $A'BC' + BD + AB'.$

Ans - c



A division of PhIE Learning Center

Q 7. The octal equivalent of decimal $1\frac{83}{512}$ is

- a). 1.123 b). 1.321
c). 11.23 d). 13.21 (IES EC 1997)

Ans – a

Q8. How many minterms (excluding redundant terms) does the minimal switching function

$$F(v,w,x,y,z) = x + \bar{y}z$$

- a). 16 b). 20
c). 24 d). 32 (IES EC 1998)

Ans – b

Q9. The number of digit 1 present in the binary representation of $3 \cdot 512 + 7 \cdot 64 + 5 \cdot 8 + 3$ is

- a). 8 b). 9
c). 10 d). 12

Ans – b

Q10. F's complement of $(2BFD)_{\text{hex}}$ is

- a). E304 b). D403
c). D402 d). C403

Ans - c

Q11. Which one of the following is equivalent to the Boolean expression $Y = A \bar{B} + B \bar{C} + C \bar{A}$

- (a) $(AB + BC + CA)'$ b) $(A' + B')(B' + C')(C' + A')$
(c) $[(A + B)(B + C)(C + A)]'$ d) $[(A + B)(B + C)]' (C + A)'$

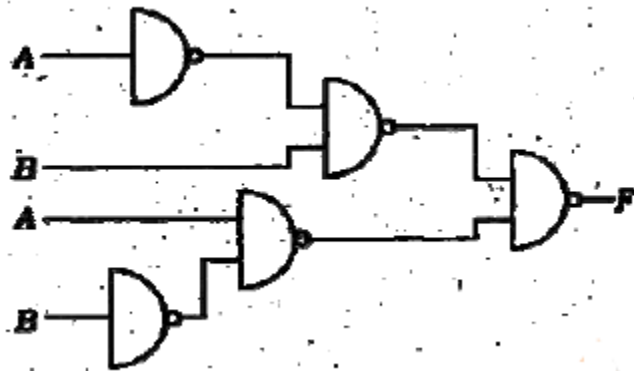
Ans – c

Q12. The Boolean expression $(A' + B)(A + C')(B' + C')$ simplifies to

- (a) $(A + B)C'$ b) $(A + B')C'$
(c) $(A' + B)C'$ d) $(A' + B')C'$

Ans – c

13. The circuit shown below is functionally equivalent to

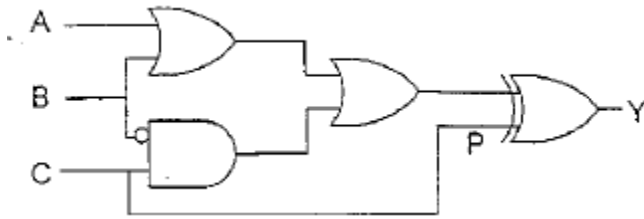


- a). NOR gate b). OR gate
c). EX-OR gate d). NAND gate

A division of PhIE Learning Center

Ans - c

Q14. Output of the following circuit if P is stuck at 1



A' is complement of A

- a) $A + B + C$
- c) $(ABC)'$

- b) $A'B'C'$
- d) 0

Ans - b

Q15. The Boolean function $(x+y)(x'+z)(y+z)$ is equal to which one of the following expressions

(a) $(x+y)(y+z)$

(b) $(x'+z)(y+z)$

(b) $(x+y)(x'+z)$

(d) $(x+y)(y+z')$

(IES EC 2005)

Ans - b

Q16. What does the Boolean expression $AD + ABCD + ACD + A'B + AC'D + A'B'$, on minimization result into

a). $A + D$

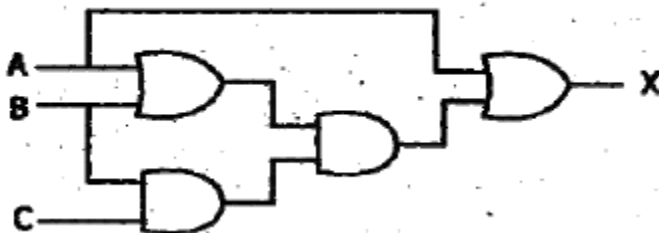
b). $AD + A'$

c). AD

d). $A' + D$

Ans - d

Q17. For the logic circuit given below, what is the simplified Boolean function



(a). $X = AB + C$

(b). $X = BC + A$

(c). $X = AB + AC$

(d). $X = AC + B$

(IES -EC 2007)

Ans - b

Q18. When the Boolean function $F(x_1 x_2 x_3) = \sum (0, 1, 2, 3) + \Phi (4, 5, 6, 7)$ is minimized, what does one get?

(a). 1

(b). 0

(c). x_1

(d). x_3

Ans - a

A division of PhIE Learning Center

Q19. By inspecting the Karnaugh map plot of the switching function $F(x_1 x_2 x_3) = \sum (1, 3, 6, 7)$ one can say that the redundant prime implicant is

- (a). $\bar{x}_1 x_3$ (b). $x_2 x_3$
(c). $x_1 x_2$ (d). x_3

Ans - b

Q20 Which one of the following statements is not correct?

- a. $X + \bar{X} Y = X$
b. $X(\bar{X} + Y) = XY$
c. $XY + X\bar{Y} = X$
d. $ZX + Z\bar{X} Y = ZX + ZY$

Ans- a

Q21. Decimal equivalent of gray code $(1100101110)_2$ is (____)

Ans - 564

Q22. Decimal representation of BDC code $1\ 0010\ 1001$ is (____)

Ans - 129

Q23. If $(0110\ 1011)$ is excess-3 code the its decimal equivalent is (____)

Ans - 38

Q24. If $(1110\ 1011\ 1101)$ is a 2421 code the its decimal equivalent is (____)

Ans - 857

Q25. 10010010 and 01011000 are two BCD number while adding this two BCD number how many correction are required (____).

Ans - 2